



REGISTRATION NUMBER :
EXAM DATE : 2-September-2016 EXAM
NAME : SSC Examination 2016 TOTAL
MARKS : 200

CANDIDATE NAME :
EXAM START TIME : 10:00:00
EXAM DURATION : 01:15 Hrs
TOTAL NO OF QUESTIONS : 100

Question 1. Select the related word/letters/numbers from the given alternatives:

दिये गये विकल्पों में से संबंधित शब्द/अक्षरों/संख्या को चुनिए।

Owl : Hoots :: Hen : ?

उल्लू : चीखना :: मुर्गी : ?

Options:

1) Chirps

चीं-चीं करना

2) Clucks

कुड़कुड़ाना

3) Coos

कूजना (गुटरगू)

4) Cackles

कूँ-कूँ करना

Correct Answer: Clucks

कुड़कुड़ाना

Candidate Answer: Cackles

कूँ-कूँ करना

Question 2. Select the related word/letters/numbers from the given alternatives:

दिये गये विकल्पों में से संबंधित शब्द/अक्षरों/संख्या को चुनिए।

AKU : ? :: CMW : DNX

Options:

1) BGL

2) BLQ

3) BGQ

4) BLV

Correct Answer: BLV

Candidate Answer: BLV

Question 3. Select the related word/letters/numbers from the given alternatives:

दिये गये विकल्पों में से संबंधित शब्द/अक्षरों/संख्या को चुनिए।

5 : 100 :: 7 : ?

Options:

1) 49

2) 196

3) 91

4) 135

Correct Answer: 196

Candidate Answer: [NOT ANSWERED]

Question 4.

For the following questions

Find the odd word/letters/number from the given alternatives.

निम्नलिखित प्रश्न में दिए गए विकल्पों में से विषम शब्द/अक्षर/संख्या युग्म को चुनिए ?

Options:

1) Time

समय

2) Skill

कौशल

3) Interest

रुचि

4) Knowledge

जानकारी

Correct Answer: Time

समय

Candidate Answer: Time

समय

Question 5.

For the following questions

Find the odd word/letters/number from the given alternatives.

निम्नलिखित प्रश्न में दिए गए विकल्पों में से विषम शब्द/अक्षर/संख्या युग्म को चुनिए ?

Options:

1) CPA

2) REB

3) QUD

4) AOT

Correct Answer: CPA

Candidate Answer: [NOT ANSWERED]

Question 6.

For the following questions

Find the odd word/letters/number pair from the given alternatives.

निम्नलिखित प्रश्न में दिए गए विकल्पों में से विषम शब्द/अक्षर/संख्या युग्म को चुनिए ?

Options:

1) 15 - 21

2) 32 - 41

3) 22 - 27

4) 31 - 35

Correct Answer: 15 - 21

Candidate Answer: [NOT ANSWERED]

Question 7. Arrange the following words as per order in the dictionary and then choose the one which comes last.

निम्नलिखित शब्दों को शब्दकोश में दिए गए क्रम के अनुसार लिखिए ?

1. Qualify 2. Quarter 3. Quarrel 4. Quaver

Options:

1) Qualify

2) Quarter

3) Quarrel

4) Quaver

Correct Answer: Quaver

Candidate Answer: Quaver

Question 8. A series is given, with one term missing. Choose the correct alternative from the given ones that will complete the series.

निम्नलिखित प्रश्न में एक अनुक्रम दिया गया है, जिसमें एक पद लुप्त है। दिए गए विकल्पों में से वह सही विकल्प चुनिए जो अनुक्रम को पूरा करेगा ?

DF, GJ, KM, NQ, RT, ?

Options:

1) EI

2) UX

3) UV

4) XY

Correct Answer: UX

Candidate Answer: UX

Question 9. A series is given, with one term missing. Choose the correct alternative from the given ones that will complete the series.

निम्नलिखित प्रश्न में एक अनुक्रम दिया गया है, जिसमें एक पद लुप्त है। दिए गए विकल्पों में से वह सही विकल्प चुनिए जो अनुक्रम को पूरा करेगा ?

2, 7, 14, 23, 34, ?

Options:

1) 47

2) 39

3) 42

4) 46

Correct Answer: 47

Candidate Answer: 47

Question 10. A and B are standing at place "P". They start moving in the opposite directions at the speed of 5 Km/h and 4 Km/h respectively. What will be the distance between them after 3 hours?

A और B, 'P' स्थान से एक दूसरे की विपरीत दिशा में क्रमशः 5 और 4 किलो मीटर प्रति घंटा की चाल से चलना शुरू करते हैं। तीन घंटे के बाद दोनों के बीच कितनी दूरी होगी ?

Options:

1) 3 kms

3 किलोमीटर

2) 21 kms

21 किलोमीटर

3) 18 kms

18 किलोमीटर

4) 27 kms

27 किलोमीटर

Correct Answer: 27 kms

27 किलोमीटर

Candidate Answer: 27 kms

27 किलोमीटर

Question 11. If Usha is taller than Nisha; Nisha is taller than Asha; Alka is taller than Usha. Harsha is shorter than Asha; then who among them is the tallest?

यदि उषा, निशा से लम्बी है; निशा, आशा से लम्बी है; अलका, उषा से लम्बी है; हर्षा, आशा से छोटी है। तब इनमें से सबसे लम्बी कौन है ?

Options:

- 1) Usha
उषा
- 2) Alka
अल्का
- 3) Nisha
निशा
- 4) Asha
आशा

Correct Answer: Alka

अल्का

Candidate Answer: Alka

अल्का

Question 12. From the given alternative words, select the word which cannot be formed using the letters of the given word:

निम्नलिखित विकल्पों में से वह शब्द चुनिए जो दिए गए शब्द के अक्षरों का प्रयोग करके नहीं बनाया जा सकता ?

DHARAMSALA**Options:**

- 1) MASALA
- 2) ARAMANA
- 3) RAMA
- 4) SAHARA

Correct Answer: ARAMANA**Candidate Answer:** ARAMANA

Question 13. If in a code GONE is written as ILPB then how may CRIB be written in that code?

यदि किसी कोड में 'GONE' को 'ILPB' लिखा जाता है। तो उसी कोड में 'CRIB' को कैसे लिखा जाएगा ?

Options:

- 1) EUKY
- 2) EKUY
- 3) EYUK
- 4) EOKY

Correct Answer: EOKY**Candidate Answer:** EOKY

Question 14.

In a certain code language, @ represents +, ⊕ represents '-', α represents '÷' and 'θ' represents 'x'. Find out the answer to the following question.

किसी कुट भाषा में @ से आशय है +, ⊕ से आशय है -, α से आशय है ÷, और θ से आशय है x तो निम्नलिखित प्रश्न का हल ज्ञात करें।

$$107 \theta 3 \oplus 64 \alpha 8 \oplus 2 \theta 9 = ?$$

Options:

- 1) 295
- 2) 290
- 3) 209
- 4) 105

Correct Answer: 295**Candidate Answer:** 295

Question 15. If $12 \times 16 = 188$ and

$$14 \times 18 = 248,$$

then find the value of

$$16 \times 20 = ?$$

यदि $12 \times 16 = 188$ और

$$14 \times 18 = 248$$
 हो, तो

16×20 का मान क्या होगा ?

Options:

1) 320

2) 360

3) 316

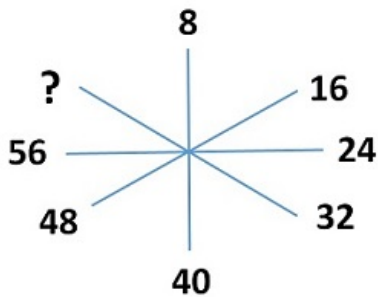
4) 318

Correct Answer: 316

Candidate Answer: 318

Question 16. Find the missing number from the given alternatives.

दिए गए विकल्पों में से लुप्त संख्या ज्ञात कीजिए ?



Options:

1) 60

2) 62

3) 64

4) 66

Correct Answer: 64

Candidate Answer: 64

Question 17. One morning, Raju walked towards the sun. After some time he turned left and again to his left. Which direction is he facing?

एक सुबह राजू सूर्य की ओर चला। कुछ देर के बाद वह बाएं घूमा और फिर अपने बाएं घूमा। उसका मुँह किस दिशा की ओर है?

Options:

1) North

उत्तर

2) South

दक्षिण

3) East

पूर्व

4) West

पश्चिम

Correct Answer: West

पश्चिम

Candidate Answer: West

पश्चिम

Question 18. One or two statements are given followed by two conclusions/assumptions, I and II. You have to consider the statement to be true, even if it seems to be at variance from commonly known facts. You are to decide which of the given conclusions/assumptions can definitely be drawn from the given statement. Indicate your answer.

Statements: 1. If people are intelligent, they should be creative.

Assumptions: I. Creativity and intelligence are related. II. Creative people are intelligent.

निम्नलिखित प्रश्न में एक या दो वक्तव्य दिए गए हैं जिनके आगे दो निष्कर्ष/मान्यताएँ, I और II निकाले गए हैं। आपको विचार करना है कि वक्तव्य सत्य है चाहे वह सामान्यतः ज्ञात तथ्यों से भिन्न प्रतीत होता हो। आपको निर्णय करना है कि दिए गए वक्तव्य में से कौन-सा निश्चित रूप से सही निष्कर्ष/मान्यता निकाला जा सकता है। अपने उत्तर को निर्दिष्ट कीजिए।

वक्तव्य : 1. यदि लोग बुद्धिमान हों, तो सृजनात्मक भी होंगे।

मान्यता : I सृजनात्मकता] और बुद्धिमानी का आपस में संबंध है।

II सृजनात्मक व्यक्ति बुद्धिमान होते हैं।

Options:

1) Only conclusion I follows

केवल मान्यता I सही है।

2) Only conclusion II follows

केवल मान्यता II सही है।

3) Both conclusion I and conclusion II follow

मान्यता I और II दोनों सही हैं।

4) Neither conclusion I nor conclusion II follows

ना तो मान्यता I सही है और ना ही निष्कर्ष II सही है।

Correct Answer: Both conclusion I and conclusion II follow

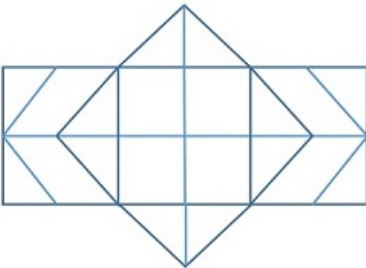
मान्यता I और II दोनों सही हैं।

Candidate Answer: Both conclusion I and conclusion II follow

मान्यता I और II दोनों सही हैं।

Question 19. How many rectangles are there in the given figure?

दी गई आकृति में कितने आयत हैं ?



Options:

1) 8

2) 15

3) 24

4) 30

Correct Answer: 30

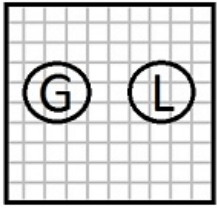
Candidate Answer: 15

Question 20. In a village some of the goldsmiths are literates. Which diagram shows literate goldsmiths?

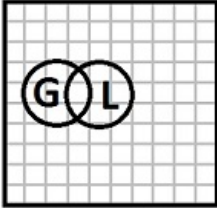
एक गाँव में कुछ सुनार साक्षर हैं। कौन-सा आरेख साक्षर सुनारों को दर्शाता है ?

Options:

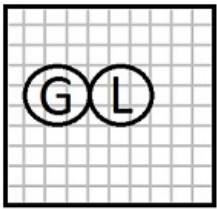
1)



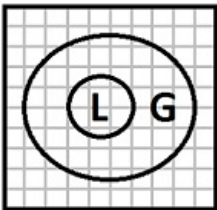
2)



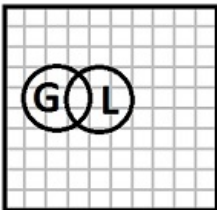
3)



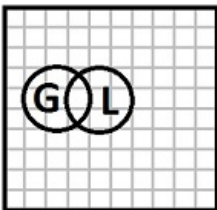
4)



Correct Answer:

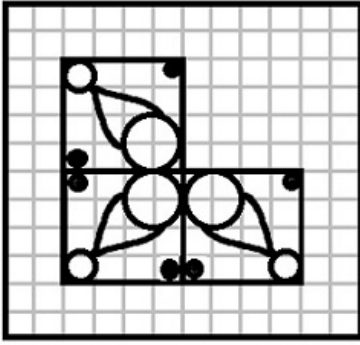


Candidate Answer:



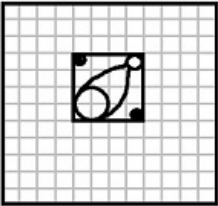
Question 21. Which answer figure will complete the pattern in the question figure?

कौन-सी उत्तर आकृति प्रश्न आकृति के प्रतिरूप को पूरा करेगी ?

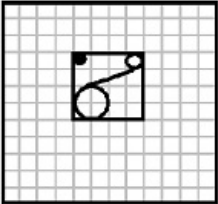


Options:

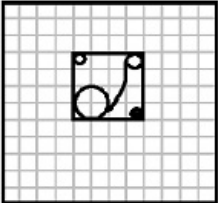
1)



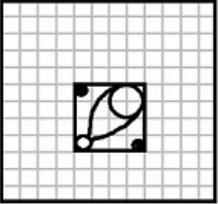
2)



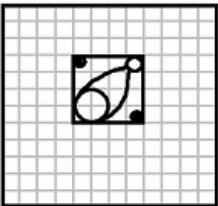
3)



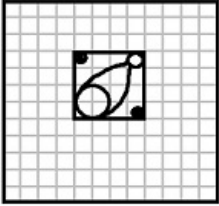
4)



Correct Answer:

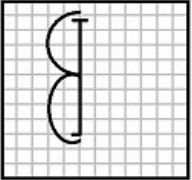


Candidate Answer:



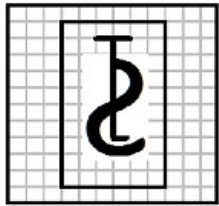
Question 22. From the given answer figures, select the one in which the question figure is hidden/embedded.

दी गई उत्तर आकृतियों में से उसे चुनिए जिसमें प्रश्न आकृति निहित है ?

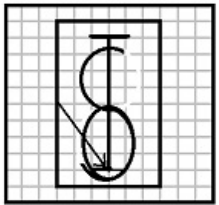


Options:


1)



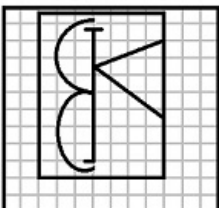
2)



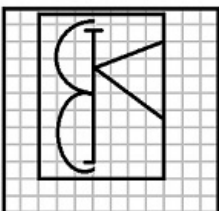
3)



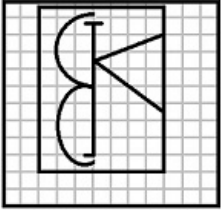
4)



Correct Answer:



Candidate Answer:



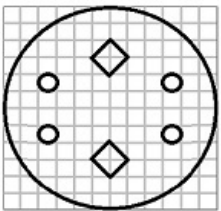
Question 23. A piece of paper is folded and cut as shown below in the question figures. From the given answer figures, indicate how it will appear when opened.

यदि किसी कागज को, नीचे प्रश्न आकृतियों में दिखाए अनुसार मोड़कर काटा जाए तो खोलने के बाद वह किस उत्तर आकृति जैसा दिखाई देगा ?

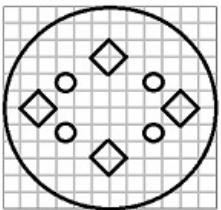


Options:

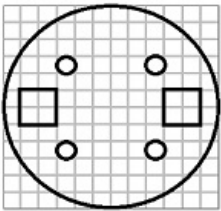
1)



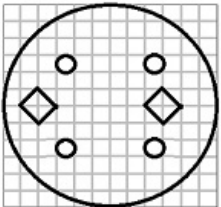
2)



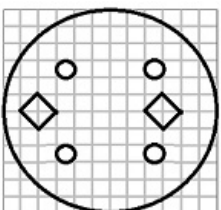
3)



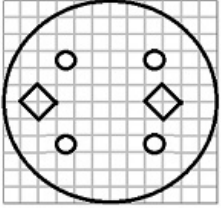
4)



Correct Answer:

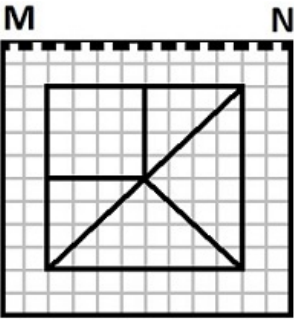


Candidate Answer:



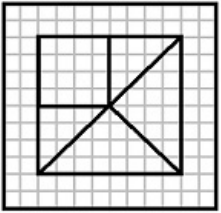
Question 24. If a mirror is placed on the line MN, then which of the answer figures is the right image of the given figure?

यदि एक दर्पण को MN रेखा पर रखा जाए तो दी गई उत्तर आकृतियों में से कौन-सी आकृति प्रश्न आकृति का सही प्रतिबिम्ब होगी ?

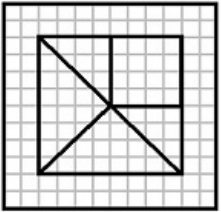


Options:

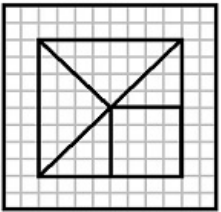
1)



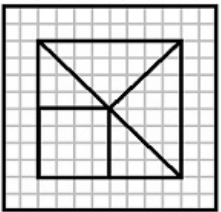
2)



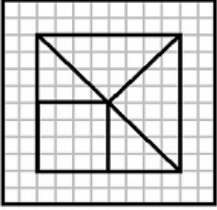
3)



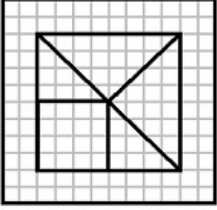
4)



Correct Answer:



Candidate Answer:



Question 25. In this question, the sets of numbers given in the alternatives are represented. The columns and rows of Matrix I are numbered from 0 to 4 and that of Matrix II are numbered from 5 to 9. A letter from these matrices can be represented first by its row and next by its column, e.g., O can be represented by 03, 11, etc., and 'F' can be represented by 55, 68, etc. Similarly you have to identify the set for the word 'BEAD'

एक शब्द केवल एक संख्या-समूह द्वारा दर्शाया गया है, जैसे कि विकल्पों में से किसी एक में दिया गया है। विकल्पों में दिए गए संख्या समूह अक्षरों के दो वर्गों द्वारा दर्शाए गए हैं, जैसे कि नीचे दिए गए दो आव्यूहों में हैं। आव्यूह I के स्तंभ और पंक्ती की संख्या 0 से 4 और आव्यूह II की 5 से 9 दी गई है। इन आव्यूहों से एक अक्षर को पहले उसकी पंक्ती और बाद में स्तम्भ संख्या द्वारा दर्शाया जा सकता है। उदाहरण के लिए 'O' को 03, 11 आदि द्वारा दर्शाया जा सकता है तथा 'F' को 55, 68 आदि द्वारा दर्शाया जा सकता है। इसी तरह से आपको दिए हुए शब्द 'BEAD' के लिए समूह को पहचानना है।

MATRIX I

	0	1	2	3	4
0	I	E	A	O	U
1	A	O	U	I	E
2	E	I	O	U	A
3	O	U	E	A	I
4	U	A	I	E	O

MATRIX II

	5	6	7	8	9
5	F	D	B	G	H
6	B	G	H	F	D
7	D	F	G	H	B
8	G	H	D	B	F
9	H	B	F	G	D

Options:

1) 97, 32, 14, 56

2) 88, 41, 20, 57

3) 57, 32, 41, 87

4) 75, 14, 20, 57

Correct Answer: 57, 32, 41, 87

Candidate Answer: [NOT ANSWERED]

Question 26. Who among the following Sikh Gurus had laid the foundation of Amritsar?

निम्नलिखित में से किस सिख गुरु ने अमृतसर की आधारशिला रखी थी ?

Options:

1) Guru Amar Das

गुरु अमर दास

2) Guru Ram Das

गुरु राम दास

3) Guru Arjan Dev

गुरु अर्जन देव

4) Guru Har Govind

गुरु हर गोविन्द

Correct Answer: Guru Ram Das

गुरु राम दास

Candidate Answer: Guru Har Govind

गुरु हर गोविन्द

Question 27. In the 42nd Constitutional Amendment 1976, which word was added to the Preamble?

42 वें संविधान संशोधन, 1976 द्वारा प्रस्तावना में कौनसा शब्द जोड़ा गया ?

Options:

1) Democratic

लोकतांत्रिक

2) Equality

समता

3) Secular

धर्मनिरपेक्ष

4) Socialist

समाजवादी

Correct Answer: Secular

धर्मनिरपेक्ष

Candidate Answer: [NOT ANSWERED]

Question 28. Which monument is known as "The National Monument of India"?

किस स्मारक को 'भारत का राष्ट्रीय स्मारक' कहते हैं ?

Options:

1) India Gate

इंडिया गेट

2) Gateway of India

गेटवे ऑफ इंडिया

3) Raj Ghat

राजघाट

4) Red fort

लाल किला

Correct Answer: India Gate

इंडिया गेट

Candidate Answer: Red fort

लाल किला

Question 29. Which of the following country has recently declared 3 month emergency following a failed military coup?

निम्नलिखित में से किस देश में अभी हाल में सैन्य विद्रोह के बाद 3 माह की आपात स्थिति लगाई गई?

Options:

1) Sudan

सूडान

2) Turkey

तुर्की

3) Maldives

मालदीव

4) Syria

सीरिया

Correct Answer: Turkey

तुर्की

Candidate Answer: Sudan

सूडान

Question 30. The award which, the famous writer and social activist Mahasweta Devi, who passed away recently, did not win

वह कौनसा पुरस्कार है, जिसे प्रसिद्ध लेखिका और सामाजिक कार्यकर्ता महाश्वेता देवी ने जिनका अभी हाल में निधन हुआ है, नहीं जीता ?

Options:

1) Sahitya Akademi Award

साहित्य अकादमी पुरस्कार

2) Jnanpith Award

ज्ञानपीठ पुरस्कार

3) Magsaysay Award

मैगसेसे पुरस्कार

4) Padam Vibhushan

पद्म विभूषण

Correct Answer: Padam Vibhushan

पद्म विभूषण

Candidate Answer: [NOT ANSWERED]

Question 31. Which place is said to be the Manchester of South India?

दक्षिण भारत का मैनचेस्टर किसे कहते हैं ?

Options:

1) Coimbatore

कोयंबटूर

2) Salem

सलेम

3) Thanjavur

तंजावुर

4) Madurai

मदुरै

Correct Answer: Coimbatore

कोयंबटूर

Candidate Answer: Madurai

मदुरै

Question 32. A galvanometer can be converted into a voltmeter by connecting with it a

गैल्वनोमीटर को किसके साथ जोड़कर उसे वोल्टमीटर बनाया जा सकता है ?

Options:

1) high resistance in parallel

समांतर उच्च प्रतिरोध

2) low resistance on parallel

समांतर निम्न प्रतिरोध

3) high resistance on series

श्रंखला में उच्च प्रतिरोध

4) low resistance in series

श्रंखला में निम्न प्रतिरोध

Correct Answer: high resistance on series

श्रंखला में उच्च प्रतिरोध

Candidate Answer: [NOT ANSWERED]

Question 33. In computer processing, _____ selects processes from the pool and loads them into memory for execution.

कम्प्यूटर प्रोसेसिंग में, _____ पूल से प्रक्रमों को चुनता है और उन्हें क्रियान्वित करने के लिए मेमोरी में लोड करता है ?

Options:

1) Job Scheduler

जॉब शेड्यूलर

2) Resource Scheduler

रिसोर्स शेड्यूलर

3) CPU Scheduler

सी.पी.यू. शेड्यूलर

4) Process Scheduler

प्रोसेस शेड्यूलर

Correct Answer: Job Scheduler

जॉब शेड्यूलर

Candidate Answer: CPU Scheduler

सी.पी.यू. शेड्यूलर

Question 34. Name the first cricketer to score 1000 runs in an innings in any competitive match

किसी प्रतियोगी मैच में एक पारी में 1000 रन बनाने वाले प्रथम क्रिकेटर का नाम बताइए ?

Options:

1) Prithvi Shaw

पृथ्वी शॉ

2) Pranav Dhanawade

प्रणव धनवाड़े

3) Virat Kohli

विराट कोहली

4) Shikhar Dhawan

शिखर धवन

Correct Answer: Pranav Dhanawade

प्रणव धनवाड़े

Candidate Answer: Pranav Dhanawade

प्रणव धनवाड़े

Question 35. The beach sands of Kerala are rich in

केरल में समुद्री तट की रेत में भरपूर मात्रा में क्या पाया जाता है ?

Options:

1) Calcium

कैल्शियम

2) Radium

रेडियम

3) Thorium

थोरियम

4) Manganese

मैंगनीज

Correct Answer: Thorium

थोरियम

Candidate Answer: Thorium

थोरियम

Question 36. During which of the following operating conditions of an automobile, carbon monoxide content in exhaust gas is maximum?

ऑटोमोबाइल की निम्नलिखित में से किस परिचालन स्थिति में एक्सहॉस्ट गैस में कार्बन मोनो ऑक्साइड का अंश अधिकतम होता है ?

Options:

1) Acceleration

त्वरण

2) Cruising

सामान्य चाल

3) Idle running

निष्क्रिय चालन

4) Deacceleration

वित्त्वरण

Correct Answer: Idle running

निष्क्रिय चालन

Candidate Answer: Deacceleration

वित्त्वरण

Question 37. India's first Railway University will come up at

भारत का पहला रेल विश्वविद्यालय कहाँ खुलेगा ?

Options:

1) Vadodara, Gujarat

वडोदरा , गुजरात

2) Bengaluru, Karnataka

बेंगलूरु, कर्नाटक

3) Hyderabad, Andhra Pradesh

हैदराबाद , आंध्र प्रदेश

4) Lucknow, Uttar Pradesh

लखनऊ, उत्तर प्रदेश

Correct Answer: Vadodara, Gujarat

वडोदरा , गुजरात

Candidate Answer: Lucknow, Uttar Pradesh

लखनऊ, उत्तर प्रदेश

Question 38. The Himalayas is the example of _____

हिमालय पर्वत किस प्रकार के पर्वत का उदाहरण है ?

Options:

- 1) Fold mountains
परतदार पर्वत
- 2) Block mountains
ब्लॉक पर्वत
- 3) Ancient mountains
प्राचीन पर्वत
- 4) Residual mountains
अपशिष्ट पर्वत

Correct Answer: Fold mountains

परतदार पर्वत

Candidate Answer: [NOT ANSWERED]

Question 39. The largest irrigation canal in India is _____

भारत में सबसे बड़ी सिंचाई नहर _____ है

Options:

- 1) Yamuna canal
यमुना नहर
- 2) Indira Gandhi canal
इंदिरा गांधी नहर
- 3) Sirhand canal
सिरहंद नहर
- 4) Upper Bari Doab canal
अपर बाड़ी दोआब नहर

Correct Answer: Indira Gandhi canal

इंदिरा गांधी नहर

Candidate Answer: Indira Gandhi canal

इंदिरा गांधी नहर

Question 40. Even after sunset, the air near the Earth's surface continue to receive heat due to

सूर्यास्त के बाद भी पृथ्वी की सतह के निकट वायु किस कारण उष्मा प्राप्त करती रहती है ?

Options:

- 1) Insolation
सूर्यातपन
- 2) Terrestrial Radiation
स्थलीय विकिरण
- 3) Conduction
चालन
- 4) Convection
संवहन

Correct Answer: Terrestrial Radiation

स्थलीय विकिरण

Candidate Answer: Terrestrial Radiation

स्थलीय विकिरण

Question 41. At the Rio Olympics, who was the flagbearer of the Indian contingent?

रियो ओलम्पिक्स में भारतीय दल के ध्वजवाहक कौन थे?

Options:

- 1) Narsingh Yadav
नरसिंह यादव
- 2) Abhinav Bindra
अभिनव बिंद्रा
- 3) Dipa Karmakar
दीपा कर्माकर
- 4) Sania Mirza
सानिया मिर्जा

Correct Answer: Abhinav Bindra

अभिनव बिंद्रा

Candidate Answer: Dipa Karmakar

दीपा कर्माकर

Question 42. A landscape which is caused due to the fissure in the earth along which one side has moved down with reference to the other is known as

उन भूआकृतियों को क्या कहते हैं, जो पृथ्वी में विभ्रंश के कारण बनती है तथा जिनके कारण एक सतह दूसरी सतह से नीचे चली जाती है ?

Options:

- 1) Rift Valley
विभ्रंश घाटी
- 2) U Shaped Valley
U आकार की घाटी
- 3) V Shaped Valley
V आकार की घाटी
- 4) Hanging Valley
निलंबी घाटी

Correct Answer: Rift Valley
विभ्रंश घाटी

Candidate Answer: [NOT ANSWERED]

Question 43. The largest artery in human body is

मानव शरीर में सबसे बड़ी धमनी कौनसी है ?

Options:

- 1) Aorta
महाधमनी
- 2) Capillary
केशिका
- 3) Vena cava
वेना केवा
- 4) Pulmonary vein
फुफ्फुसीय शिरा

Correct Answer: Aorta
महाधमनी

Candidate Answer: [NOT ANSWERED]

Question 44. An eudiometer measures

यूडियोमीटर किसका मापन करता है ?

Options:

- 1) Atmospheric pressure
वायुमंडलीय दाब
- 2) Time
समय
- 3) Volume of gases
गैस का आयतन
- 4) Vapour pressure
वाष्प दाब

Correct Answer: Volume of gases
गैस का आयतन

Candidate Answer: Vapour pressure
वाष्प दाब

Question 45. Trinitrotoluene is

ट्रिनाइट्रोटोल्यून का प्रयोग कहा किया जाता है

Options:

- 1) used to melt metals
धातु को गलाने के लिए
- 2) used to fuse two metals
दो धातुओं के संगलन के लिए
- 3) used as an abrasive
अपघर्षक के रूप में
- 4) used as an explosive
विस्फोटक के रूप में

Correct Answer: used as an explosive
विस्फोटक के रूप में

Candidate Answer: [NOT ANSWERED]

Question 46. In a cut motion, when the amount of demand is reduced by Rs 100/- , it is known as

कटौती प्रस्ताव में, जब मांग की राशि रु. 100 कम कर दी जाती है, तो उसे क्या कहते हैं ?

Options:

1) Disapproval of policy cut

नीतिगत कटौती की अस्वीकृति

2) Economy cut

मितव्ययी कटौती

3) Vote on Account

लेखानुदान

4) Token cut

सांकेतिक कटौती

Correct Answer: Token cut

सांकेतिक कटौती

Candidate Answer: [NOT ANSWERED]

Question 47. One of the leading producers of asbestos in the world is

विश्व में एस्बेस्टॉस का अग्रणी उत्पादक देश है ?

Options:

1) Australia

ऑस्ट्रेलिया

2) Russia

रूस

3) Canada

कनाडा

4) Armenia

अर्मेनिया

Correct Answer: Canada

कनाडा

Candidate Answer: [NOT ANSWERED]

Question 48. Beighton Cup is associated with which of the following?

बेटन कप निम्नलिखित में से किस खेल से संबद्ध है ?

Options:

1) Cricket

क्रिकेट

2) Hockey

हॉकी

3) Football

फुटबॉल

4) Volleyball

वॉलीबॉल

Correct Answer: Hockey

हॉकी

Candidate Answer: [NOT ANSWERED]

Question 49. If Reserve Bank of India reduces the cash reserve ratio, it will :

यदि भारतीय रिजर्व बैंक नकद रिजर्व अनुपात कम करती है तो क्या परिणाम होगा ?

Options:

1) increase credit creation

ऋण सृजन बढ़ेगा

2) decrease credit creation

ऋण सृजन घटेगा

3) have no impact on credit creation

ऋण सृजन पर कोई प्रभाव नहीं पड़ेगा

4) have no definite impact on credit creation

ऋण सृजन पर कोई निश्चित प्रभाव नहीं पड़ेगा

Correct Answer: increase credit creation

ऋण सृजन बढ़ेगा

Candidate Answer: [NOT ANSWERED]

Question 50. Nitrification is the biological process of converting

नाइट्रीकरण किसे परिवर्तित करने की जैविक प्रक्रिया है ?

Options:

1) N_2 into nitrate

N_2 को नाइट्रेट में

2) N_2 into nitrite

N_2 को नाइट्राइट में

3) Ammonia into nitrite

अमोनिया को नाइट्राइट में

4) Ammonia into N_2

अमोनिया को N_2 में

Correct Answer: Ammonia into nitrite

अमोनिया को नाइट्राइट में

Candidate Answer: Ammonia into nitrite

अमोनिया को नाइट्राइट में

Question 51. If 20 men working 8 hours per day can complete a piece of work in 21 days. How many hours per day must 48 men work to complete the same job in 7 days?

यदि 20 व्यक्ति 8 घंटे प्रति दिन काम करके किसी काम को 21 दिन में पूरा कर सकते हैं। तो बताएं 48 व्यक्ति प्रतिदिन कितने घंटे काम करें कि वह काम 7 दिन में पूरा हो जाए ?

Options:

1) 12

2) 20

3) 10

4) 15

Correct Answer: 10

Candidate Answer: 10

Question 52.

ABCD is a cyclic quadrilateral. $\angle DBA = 50^\circ$ and $\angle ADB = 33^\circ$. Then the measure of $\angle BCD$ is

ABCD एक चक्रीय त्रिभुज है। कोण $\angle DBA = 50^\circ$ और कोण $\angle ADB = 33^\circ$ हो, तो कोण $\angle BCD$ का मान बताइए ?

Options:

1) 83°

2) 80°

3) 75°

4) 60°

Correct Answer: 83°

Candidate Answer: [NOT ANSWERED]

Question 53. A shop keeper earns a profit of 12% on selling a book at 10% discount on the printed price. The ratio of cost price to the printed price of the book is

एक दुकानदार अंकित मूल्य पर 10% की छूट देने के बाद 12% लाभ आर्जित करता है। पुस्तक के क्रय मूल्य और अंकित मूल्य के बीच अनुपात बताइए ?

Options:

1) 45:56

2) 50: 61

3) 99: 125

4) None of these

इनमें से कोई नहीं

Correct Answer: 45:56

Candidate Answer: 50: 61

Question 54. The number of pupils of a class is 55. The ratio of the number of male pupils to the number of female pupils is 5: 6. The number of female pupils is

किसी कक्षा में छात्रों की संख्या 55 है। छात्र और छात्राओं के बीच 5: 6 का अनुपात है। छात्राओं की संख्या बताइए ?

Options:

- 1) 11
- 2) 25
- 3) 30
- 4) 35

Correct Answer: 30

Candidate Answer: 25

Question 55.5% more is gained by selling a watch for Rs. 350 than by selling it for Rs. 340. The cost price of the watch is

किसी घड़ी को Rs. 340 के बजाय यदि Rs. 350 में बेचा जाए तो 5% अतिरिक्त लाभ होता है। घड़ी का क्रय मूल्य बताइए ?

Options:

- 1) Rs. 110
- 2) Rs. 140
- 3) Rs. 200
- 4) Rs. 250

Correct Answer: Rs. 200

Candidate Answer: Rs. 200

Question 56.If 60% of the students in a school are boys and number of girls is 812, how many boys are there in the school?

यदि किसी विद्यालय में 60% विद्यार्थीलड़के हैं और लड़कियों की संख्या 812 है तो विद्यालय में कुल कितने लड़के हैं?

Options:

- 1) 1128
- 2) 1218
- 3) 1821
- 4) 1281

Correct Answer: 1218

Candidate Answer: 1218

Question 57.It takes eight hours for a 600 km journey, if 120 km is done by train and the rest by car. It takes 20 minutes more, if 200 km is done by train and the rest by car. The ratio of the speed of the train to that of the car is:

600 कि.मी. लम्बी यात्रा में से यदि 120 कि.मी. की यात्रा ट्रेन से की जाए और शेष यात्रा कार से, तो यात्रा 8 घण्टे में पूरी होती है। और यदि वही यात्रा ट्रेन से 200 कि.मी. और शेष यात्रा कार से तय की जाए तो 20 मिनट का समय अधिक लगता है। ट्रेन और कार की चाल का अनुपात बताइए ?

Options:

- 1) 3:5
- 2) 3:4
- 3) 4: 3
- 4) 4: 5

Correct Answer: 3:4

Candidate Answer: [NOT ANSWERED]

Question 58.

If $a + \frac{1}{a} = 1$, then the value of $\frac{a^2 - a + 1}{a^2 + a + 1}$ is ($a \neq 0$)

यदि $a + \frac{1}{a} = 1$ हो, तो $\frac{a^2 - a + 1}{a^2 + a + 1}$ का मान ज्ञात कीजिए ? ($a \neq 0$)

Options:

- 1) 1
- 2) -1
- 3) 0
- 4) 2

Correct Answer: 0

Candidate Answer: [NOT ANSWERED]

Question 59. If $m + n = 1$, then the value of $m^3 + n^3 + 3mn$ is equal to

यदि $m + n = 1$ हो, तो $m^3 + n^3 + 3mn$ का मान किसके बराबर होगा ?

Options:

- 1) 0
- 2) 1
- 3) 2
- 4) 3

Correct Answer: 1

Candidate Answer: 1

Question 60. The maximum number of common tangents that can be drawn to two disjoint circles is

दो असंयुक्त वृत्तों से अधिकतम संख्या में कितनी उभयनिष्ठ स्पर्श रेखाएं खींची जा सकती हैं ?

Options:

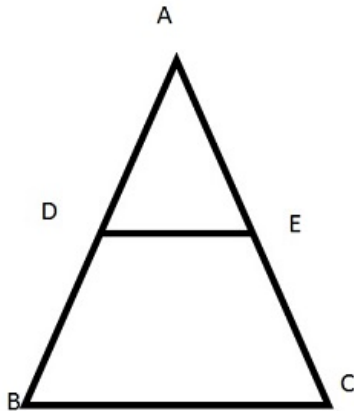
- 1) 1
- 2) 2
- 3) 4
- 4) Infinitely many

Correct Answer: 4

Candidate Answer: 2

Question 61. In figure, $DE \parallel BC$. If $DE = 3$ cm, $BC = 6$ cm and area of $\triangle ADE = 15$ sq cm, then the area of $\triangle ABC$ is

चित्र में, $DE \parallel BC$. यदि $DE = 3$ से.मी., $BC = 6$ से.मी. और $\triangle ADE$ का क्षेत्रफल 15 से.मी.² है, तो $\triangle ABC$ का क्षेत्रफल ज्ञात कीजिए ?



Options:

- 1) 75 sq cm
75 से.मी.²
- 2) 45 sq cm
45 से.मी.²
- 3) 30 sq cm
30 से.मी.²
- 4) 60 sq cm
60 से.मी.²

Correct Answer: 60 sq cm

60 से.मी.²

Candidate Answer: [NOT ANSWERED]

Question 62.If $\cos^4\theta - \sin^4\theta = 1/3$, then the value of $\tan^2\theta$ is

यदि $\cos^4\theta - \sin^4\theta = 1/3$ हो, तो $\tan^2\theta$ का मान बताइए ?

Options:

1) $1/2$

2) $1/3$

3) $1/4$

4) $1/5$

Correct Answer: $1/2$

Candidate Answer: [NOT ANSWERED]

Question 63.If a perfect square, not divisible by 6, be divided by 6, the remainder will be

यदि कोई पूर्ण वर्ग जो 6 से विभाज्य न हो और उसे 6 से विभक्त कर दिया जाए तो शेषफल क्या होगा ?

Options:

1) 1, 3 or 5

2) 1, 2 or 5

3) 1, 3 or 4

4) 1, 2 or 4

Correct Answer: 1, 3 or 4

Candidate Answer: 1, 3 or 4

Question 64.A batsman in his 12th innings makes a score of 120, and thereby increase his average by 5. The average score after 12th innings is

एक बल्लेबाज की 12वीं पारी का स्कोर 120 रन है और इस तरह से उसके औसत में 5 रन की वृद्धि होती है। बताएं कि 12वीं पारी के बाद उसका औसतन स्कोर क्या है ?

Options:

1) 60

2) 55

3) 65

4) 70

Correct Answer: 65

Candidate Answer: [NOT ANSWERED]

Question 65.

The value of $\sqrt{-\sqrt{3} + \sqrt{3 + 8\sqrt{7} + 4\sqrt{3}}}$ is

$\sqrt{-\sqrt{3} + \sqrt{3 + 8\sqrt{7} + 4\sqrt{3}}}$ का मान है!

Options:

1) 2

2) 4

3) ± 2

4) -2

Correct Answer: 2

Candidate Answer: [NOT ANSWERED]

Question 66.

If $x^4 + \frac{1}{x^4} = 119$, then the value of $x - \frac{1}{x}$ is

यदि $x^4 + \frac{1}{x^4} = 119$, हो, तो $x - \frac{1}{x}$ का मान ज्ञात कीजिए ?

Options:

- 1) 6
- 2) 12
- 3) 11
- 4) 3

Correct Answer: 3

Candidate Answer: [NOT ANSWERED]

Question 67. The side BC of the ΔABC is extended to the point D. If $\angle ACD = 112^\circ$ and $\angle B = \frac{3}{4} \angle A$, then the value of $\angle B$ is

यदि किसी ΔABC की भुजा BC को बिन्दु D तक बढ़ा दिया जाए और अगर उसका $\angle ACD = 112^\circ$ तथा $\angle B = \frac{3}{4} \angle A$ हो तो $\angle B$ का मान बताइए ?

Options:

- 1) 64°
- 2) 48°
- 3) 46°
- 4) 50°

Correct Answer: 48°

Candidate Answer: [NOT ANSWERED]

Question 68. ΔABC is a right angled triangle, the radius of its circumcircle is 3 cm and the length of its altitude drawn from the opposite vertex to the hypotenuse is 2 cm. Then the area of the triangle is

ΔABC एक समकोण त्रिभुज है, उसके परिवृत्त की त्रिज्या 3 से.मी. है और विपरीत शिरोबिन्दु से कर्ण की ओर खींचे गए शीर्ष लम्ब की लम्बाई 2 से.मी. है तो त्रिभुज का क्षेत्रफल क्या होगा ?

Options:

- 1) 12 sq cm
12 से.मी.²
- 2) 3 sq cm
3 से.मी.²
- 3) 6 sq cm
6 से.मी.²
- 4) 5 sq cm
5 से.मी.²

Correct Answer: 6 sq cm

6 से.मी.²

Candidate Answer: [NOT ANSWERED]

Question 69. The height of a tower is $50\sqrt{3}$ m. The angle of elevation of a tower from a distance 50 m from its feet is

किसी मीनार की ऊंचाई $50\sqrt{3}$ मीटर है। मीनार के आधार से 50 मीटर की दूरी पर उन्नयन कोण क्या होगा ?

Options:

- 1) 30°
- 2) 45°
- 3) 60°
- 4) 90°

Correct Answer: 60°

Candidate Answer: [NOT ANSWERED]

Question 70. The amount of Rs. 10,000 after 2 years, compounded annually with the rate of interest being 10% per annum during the first year and 12% per annum during the second year, would be (in rupees)

वार्षिक संयोजित किए जाने वाले चक्रवृद्धि ब्याज पर, जिसमें पहले वर्ष की ब्याज दर 10% हो और दूसरे वर्ष की ब्याज दर 12% वार्षिक हो, तो रु 10000 की राशि 2 वर्ष के पश्चात (रूपये में) क्या होगी ?

Options:

- 1) 11,320
- 2) 12,000
- 3) 12,320
- 4) 12,500

Correct Answer: 12,320

Candidate Answer: [NOT ANSWERED]

Question 71. The value of $\tan 80^\circ \tan 10^\circ + \sin^2 70^\circ + \sin 20^\circ$ is

$\tan 80^\circ \tan 10^\circ + \sin^2 70^\circ + \sin 20^\circ$ का मान बताइए ?

Options:

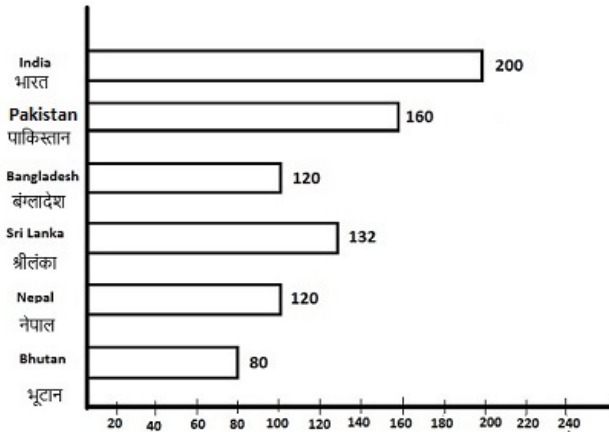
- 1) 0
- 2) 1
- 3) 2
- 4) $\frac{\sqrt{3}}{2}$

Correct Answer: 2

Candidate Answer: [NOT ANSWERED]

Question 72. The bar graph given below shows the per acre yield (in kg) of different countries. Study the graph carefully and answer the questions

नीचे दिए गए बार ग्राफ में अलग-अलग देशों की प्रति एकड़ उपज (कि.ग्रा. में) दर्शायी गई है। ग्राफ को ध्यान से पढ़िए और प्रश्नों के उत्तर دیجिए।



The average yield of the given countries is

दिए गए देशों की औसत उपज क्या है ?

Options:

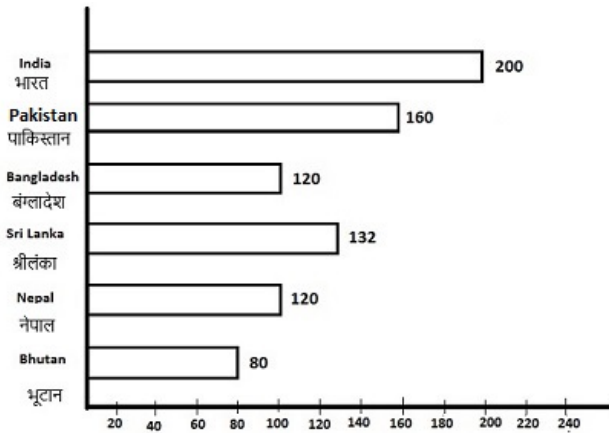
- 1) $132\frac{1}{3}$
- 2) $133\frac{1}{3}$
- 3) $134\frac{1}{3}$
- 4) $135\frac{1}{3}$

Correct Answer: $135\frac{1}{3}$

Candidate Answer: $135\frac{1}{3}$

Question 73. The bar graph given below shows the per acre yield (in kg) of different countries. Study the graph carefully and answer the questions

नीचे दिए गए बार ग्राफ में अलग-अलग देशों की प्रति एकड़ उपज (कि.ग्रा. में) दर्शायी गई है। ग्राफ को ध्यान से पढ़िए और प्रश्नों के उत्तर دیجिए।



By how much percentage is India's per acre yield more than that of Pakistan's?

भारत की प्रति एकड़ उपज पाकिस्तान की प्रति एकड़ उपज से कितने प्रतिशत अधिक है ?

Options:

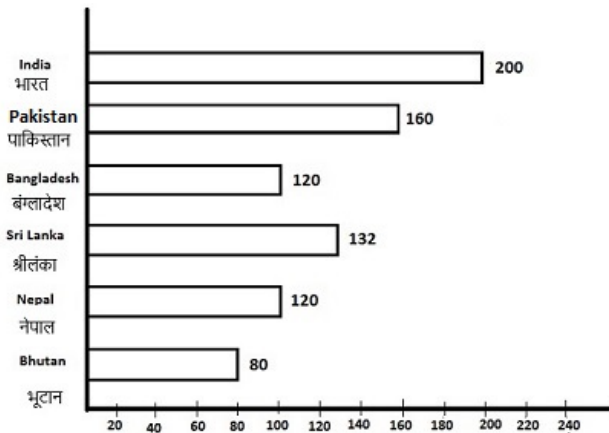
- 1) 20%
- 2) 25%
- 3) $33 \frac{1}{3}\%$
- 4) 35%

Correct Answer: 25%

Candidate Answer: 25%

Question 74. The bar graph given below shows the per acre yield (in kg) of different countries. Study the graph carefully and answer the questions

नीचे दिए गए बार ग्राफ में अलग-अलग देशों की प्रति एकड़ उपज (कि.ग्रा. में) दर्शायी गई है। ग्राफ को ध्यान से पढ़िए और प्रश्नों के उत्तर دیجिए।



Srilanka's yield (approximately) is what percent of total yield of all the countries?

सब देशों की कुल मिला कर उपज में से श्रीलंका की उपज कितने प्रतिशत (लगभग) है?

Options:

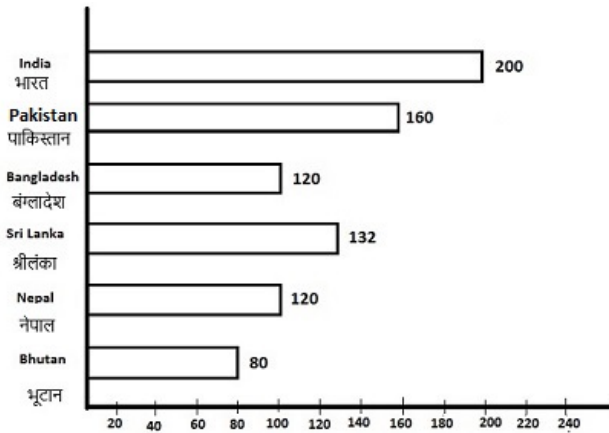
- 1) 17.8%
- 2) 16.2%
- 3) 18.2%
- 4) 15.4%

Correct Answer: 16.2%

Candidate Answer: 15.4%

Question 75. The bar graph given below shows the per acre yield (in kg) of different countries. Study the graph carefully and answer the questions

नीचे दिए गए बार ग्राफ में अलग-अलग देशों की प्रति एकड़ उपज (कि.ग्रा. में) दर्शायी गई है। ग्राफ को ध्यान से पढ़िए और प्रश्नों के उत्तर دیجिए।



Writing the yields of all countries in ascending order, the difference between the sum of yields of first three countries to that of last three countries is

यदि सभी देशों की उपज को आरोही क्रम में लिखा जाए तो पहले तीन देशों की कुल उपज और अंतिम तीन देशों की कुल उपज में क्या अन्तर होगा ?

Options:

- 1) 200 kg
200 कि.ग्रा.
- 2) 212 kg
212 कि.ग्रा.
- 3) 172 kg
172 कि.ग्रा.
- 4) 162 kg
162 कि.ग्रा.

Correct Answer: 172 kg

172 कि.ग्रा.

Candidate Answer: 172 kg

172 कि.ग्रा.

Question 76. In the following question, out of the four alternatives, choose the word which best expresses the meaning of the given word and click the button corresponding to it.

CUPIDITY

Options:

- 1) FEAR
- 2) FRIENDSHIP
- 3) GREED
- 4) LOVE

Correct Answer: GREED

Candidate Answer: [NOT ANSWERED]

Question 77. In the following question, out of the four alternatives, choose the word which is opposite in meaning to the given word and click the button corresponding to it.

CAPTIVATE

Options:

- 1) DISTRACT
- 2) OBSCURE
- 3) IMPRISON
- 4) RELEASE

Correct Answer: DISTRACT

Candidate Answer: [NOT ANSWERED]

Question 78. Four words are given, out of which only one word is spelt correctly. Choose the correctly spelt word and click the button corresponding to it.

Options:

- 1) Clandistine
- 2) Clandestine
- 3) Clandistene
- 4) Clandestene

Correct Answer: Clandestine

Candidate Answer: Clandistene

Question 79. In the following questions, one part of the sentence may have an error. Find out which part of the sentence has an error and click the button corresponding to it. If the sentence is free from error, click the "No error" option.

Can I have (A) / a loaf of bread (B) / and a jam jar? (C) / No error (D)

Options:

- 1) A
- 2) B
- 3) C
- 4) D

Correct Answer: C

Candidate Answer: C

Question 80. In the following questions, one part of the sentence may have an error. Find out which part of the sentence has an error and click the button corresponding to it. If the sentence is free from error, click the "No error" option.

Now that I am back at work, (A) / I have beginning (B) / to feel much better. (C) / No error (D)

Options:

- 1) A
- 2) B
- 3) C
- 4) D

Correct Answer: B

Candidate Answer: B

Question 81. In the following questions, one part of the sentence may have an error. Find out which part of the sentence has an error and click the button corresponding to it. If the sentence is free from error, click the "No error" option.

The artist, plainly a better critic (A) / than painter, destroyed what (B) / he made over for ten years. (C) / No error (D)

Options:

- 1) A
- 2) B
- 3) C
- 4) D

Correct Answer: C

Candidate Answer: [NOT ANSWERED]

Question 82. The sentences given with blanks are to be filled with an appropriate word(s). Four alternatives are suggested for each question. For each question, choose the correct alternative and click the button corresponding to it.

Never give your friends _____ .

Options:

- 1) the cold arm
- 2) the cold elbow
- 3) the cold shoulder
- 4) the cold hand

Correct Answer: the cold shoulder

Candidate Answer: the cold hand

Question 83. The sentences given with blanks are to be filled with an appropriate word(s). Four alternatives are suggested for each question. For each question, choose the correct alternative and click the button corresponding to it.

My mother upset the kettle of boiling water and _____ her hand.

Options:

- 1) scalded
- 2) scolded
- 3) scorched
- 4) wounded

Correct Answer: scalded

Candidate Answer: scorched

Question 84. The sentences given with blanks are to be filled with an appropriate word(s). Four alternatives are suggested for each question. For each question, choose the correct alternative and click the button corresponding to it.

His writings are _____ mistakes.

Options:

- 1) brooded with
- 2) burst into
- 3) replete with
- 4) boasted of

Correct Answer: replete with

Candidate Answer: boasted of

Question 85. In each of the questions, four alternatives are given for the Idiom/Phrase. Choose the alternative which best expresses the meaning of the Idiom/Phrase and click the button corresponding to it.

Cut a sorry figure

Options:

- 1) Did not stand straight
- 2) Apologised for his remarks
- 3) Created a wrong impression
- 4) Made a poor impression

Correct Answer: Made a poor impression

Candidate Answer: Apologised for his remarks

Question 86. In each of the questions, four alternatives are given for the Idiom/Phrase. Choose the alternative which best expresses the meaning of the Idiom/Phrase and click the button corresponding to it.

To take to task

Options:

- 1) Forgave him
- 2) Slapped him
- 3) Gave him extra work
- 4) Reprimanded him

Correct Answer: Reprimanded him

Candidate Answer: Gave him extra work

Question 87. In each of the questions, four alternatives are given for the Idiom/Phrase. Choose the alternative which best expresses the meaning of the Idiom/Phrase and click the button corresponding to it.

Bring to light

Options:

- 1) Introduced
- 2) Revealed
- 3) Seen
- 4) Brought to life

Correct Answer: Revealed

Candidate Answer: Introduced

Question 88. Out of the four alternatives, choose the one which can be substituted for the given words/sentences and click the button corresponding to it.

A job carrying no salary

Options:

- 1) Honorary
- 2) Memento
- 3) Honorarium
- 4) Memorandum

Correct Answer: Honorary

Candidate Answer: Honorary

Question 89. Out of the four alternatives, choose the one which can be substituted for the given words/sentences and click the button corresponding to it.

Act of stealing something in small quantities

Options:

- 1) Pillage
- 2) Plagiarise
- 3) Proliferate
- 4) Pilferage

Correct Answer: Pilferage

Candidate Answer: [NOT ANSWERED]

Question 90. Out of the four alternatives, choose the one which can be substituted for the given words/sentences and click the button corresponding to it.

Pertaining to the west

Options:

- 1) Celestial
- 2) Occidental
- 3) Oriental
- 4) Terrestrial

Correct Answer: Occidental

Candidate Answer: [NOT ANSWERED]

Question 91. A sentence/a part of the sentence is underlined. Four alternatives are given to the underlined part which will improve the sentence. Choose the correct alternative and click the button corresponding to it. In case no improvement is needed, click the button corresponding to "No improvement".

As soon as I arrived in home, I knew that something was wrong.

Options:

- 1) arrived by home
- 2) arrived home
- 3) arrived my home
- 4) No improvement

Correct Answer: arrived home

Candidate Answer: No improvement

Question 92. A sentence/a part of the sentence is underlined. Four alternatives are given to the underlined part which will improve the sentence. Choose the correct alternative and click the button corresponding to it. In case no improvement is needed, click the button corresponding to "No improvement".

Unfortunately I did not pass in the examination

Options:

- 1) I did not pass over
- 2) I did not overcome
- 3) I did not pass
- 4) No improvement

Correct Answer: I did not pass

Candidate Answer: No improvement

Question 93. A sentence/a part of the sentence is underlined. Four alternatives are given to the underlined part which will improve the sentence. Choose the correct alternative and click the button corresponding to it. In case no improvement is needed, click the button corresponding to "No improvement".

His powerful desire brought about his downfall.

Options:

- 1) His wishful desire
- 2) His desire for power
- 3) His eager desire
- 4) No improvement

Correct Answer: His desire for power

Candidate Answer: His wishful desire

Question 94. A sentence/a part of the sentence is underlined. Four alternatives are given to the underlined part which will improve the sentence. Choose the correct alternative and click the button corresponding to it. In case no improvement is needed, click the button corresponding to "No improvement".

Ramesh laid in the shade of a tree before he could walk further.

Options:

- 1) lied
- 2) lay
- 3) lain
- 4) No improvement

Correct Answer: lay

Candidate Answer: lied

Question 95. A sentence/a part of the sentence is underlined. Four alternatives are given to the underlined part which will improve the sentence. Choose the correct alternative and click the button corresponding to it. In case no improvement is needed, click the button corresponding to "No improvement".

An education in handling money would imply the ability to oversee the consequences of over-spending or over-borrowing.

Options:

- 1) foresee
- 2) overlook
- 3) overvalue
- 4) No improvement

Correct Answer: foresee

Candidate Answer: foresee

Question 96. A passage is given with 5 questions following it. Read the passage carefully and choose the best answer to each question out of the four alternatives and click the button corresponding to it.

A knowledge of grammar is essential for good speaking and writing, by which one's mind is judged. Studying grammar means hard work: it must be learned as a whole, with no part omitted, and it demands much thought and patience. But, once acquired, it can give a life-time's pleasure and profit. Its study requires no physical hardship, no special room or expenses. If people spent only their leisure time studying grammar they could master it in one year. The author learned it in less than a year. As a private soldier earning sixpence a day, he sat on his bed and studied. Unable to afford candle or oil, he read in winter by firelight (when it was his turn). If he could manage it thus, and with no outside encouragement, then any youth, however poor or busy, could do the same.

Why should we learn grammar?

Options:

- 1) To develop speaking skills
- 2) To develop writing skills
- 3) To have a mastery over language
- 4) To acquire good speaking and writing skills

Correct Answer: To acquire good speaking and writing skills

Candidate Answer: To acquire good speaking and writing skills

Question 97. A passage is given with 5 questions following it. Read the passage carefully and choose the best answer to each question out of the four alternatives and click the button corresponding to it.

A knowledge of grammar is essential for good speaking and writing, by which one's mind is judged. Studying grammar means hard work: it must be learned as a whole, with no part omitted, and it demands much thought and patience. But, once acquired, it can give a life-time's pleasure and profit. Its study requires no physical hardship, no special room or expenses. If people spent only their leisure time studying grammar they could master it in one year. The author learned it in less than a year. As a private soldier earning sixpence a day, he sat on his bed and studied. Unable to afford candle or oil, he read in winter by firelight (when it was his turn). If he could manage it thus, and with no outside encouragement, then any youth, however poor or busy, could do the same.

How does the world judge a man's mind?

Options:

- 1) By his dress
- 2) By his manners
- 3) By his appearance
- 4) By his speech and writing

Correct Answer: By his speech and writing

Candidate Answer: By his speech and writing

Question 98. A passage is given with 5 questions following it. Read the passage carefully and choose the best answer to each question out of the four alternatives and click the button corresponding to it.

A knowledge of grammar is essential for good speaking and writing, by which one's mind is judged. Studying grammar means hard work: it must be learned as a whole, with no part omitted, and it demands much thought and patience. But, once acquired, it can give a life-time's pleasure and profit. Its study requires no physical hardship, no special room or expenses. If people spent only their leisure time studying grammar they could master it in one year. The author learned it in less than a year. As a private soldier earning sixpence a day, he sat on his bed and studied. Unable to afford candle or oil, he read in winter by firelight (when it was his turn). If he could manage it thus, and with no outside encouragement, then any youth, however poor or busy, could do the same.

How long would it take to gain mastery over grammar?

Options:

- 1) One year
- 2) Six months
- 3) Two years
- 4) Ten months

Correct Answer: One year

Candidate Answer: One year

Question 99. A passage is given with 5 questions following it. Read the passage carefully and choose the best answer to each question out of the four alternatives and click the button corresponding to it.

A knowledge of grammar is essential for good speaking and writing, by which one's mind is judged. Studying grammar means hard work: it must be learned as a whole, with no part omitted, and it demands much thought and patience. But, once acquired, it can give a life-time's pleasure and profit. Its study requires no physical hardship, no special room or expenses. If people spent only their leisure time studying grammar they could master it in one year. The author learned it in less than a year. As a private soldier earning sixpence a day, he sat on his bed and studied. Unable to afford candle or oil, he read in winter by firelight (when it was his turn). If he could manage it thus, and with no outside encouragement, then any youth, however poor or busy, could do the same.

What is the occupation of the writer?

Options:

- 1) Teacher
- 2) Soldier
- 3) Artist
- 4) Clerk

Correct Answer: Soldier

Candidate Answer: Teacher

Question 100. A passage is given with 5 questions following it. Read the passage carefully and choose the best answer to each question out of the four alternatives and click the button corresponding to it.

A knowledge of grammar is essential for good speaking and writing, by which one's mind is judged. Studying grammar means hard work: it must be learned as a whole, with no part omitted, and it demands much thought and patience. But, once acquired, it can give a life-time's pleasure and profit. Its study requires no physical hardship, no special room or expenses. If people spent only their leisure time studying grammar they could master it in one year. The author learned it in less than a year. As a private soldier earning sixpence a day, he sat on his bed and studied. Unable to afford candle or oil, he read in winter by firelight (when it was his turn). If he could manage it thus, and with no outside encouragement, then any youth, however poor or busy, could do the same.

The learning of grammar should be

Options:

- 1) patient, thoughtful and holistic
- 2) thoughtful, patient and piecemeal
- 3) holistic, thoughtful and rapid
- 4) thoughtful, rapid and piecemeal

Correct Answer: patient, thoughtful and holistic

Candidate Answer: [NOT ANSWERED]

www.toprankers.com