



RAILWAY RECRUITMENT BOARDS

रेलवे भर्ती बोर्ड

RRB NTPC Graduate 18th Jan 2017 Shift 3

Roll No:	
Participants Name:	
Test Center Name:	
Test Date:	18/01/2017
Test Time:	4:00 PM - 5:30 PM
Subject:	RRB NTPC Graduate

- Options shown in green color with a tick icon are correct
- Chosen option on top right of the question indicates the option selected by the candidate

Q.1 Lifeline Express (LLE), the World's first 'Hospital on Train', went on its maiden journey on

- Ans
- ☒ 1. July 16, 2000
 - ☒ 2. July 16, 1992
 - ☒ 3. July 16, 1993
 - ☒ 4. July 16, 1991

Question ID : 584189284

Status : Not Attempted

Chosen Option : --

Q.2 Priya invested a certain amount of money and got back an amount of Rs. 8800 after 3 years. If the rate of simple interest is 40 %, what is the principal amount invested by Priya?

- Ans
- ☒ 1. Rs. 7000
 - ☒ 2. Rs. 4000
 - ☒ 3. Rs. 4333
 - ☒ 4. Rs. 7333

Question ID : 584189311

Status : Answered

Chosen Option : 4

Q.3 A piece of wire, bent in the shape of a square having 44 cm as its side, is subsequently bent to form a circle. What will be the radius of the circle?

- Ans
- ☒ 1. 14 cm
 - ☒ 2. 56 cm
 - ☒ 3. 28 cm
 - ☒ 4. 108 cm

Question ID : 584189300

Status : Answered

Chosen Option : 3

Q.4 Which of the following is used by a computer to translate the procedure oriented language program into machine language program?

- Ans
- ☒ 1. Scanner
 - ☒ 2. Plotter
 - ☒ 3. Compiler
 - ☒ 4. VDU (Video Display Unit)

Question ID : 584189280

Status : Answered

Chosen Option : 3

Q.5 Based on the relationship between the first two words, find out the missing word.

TERRESTRIALS : ANTS :: AMPHIBIANS : _____

- Ans
- ☒ 1. FISH
 - ☒ 2. SNAILS
 - ☒ 3. FROGS
 - ☒ 4. DOGS




Question ID : 584189367

Status : Answered

Chosen Option : 3




Q.6 Which of the following is one of the largest and the most versatile space telescopes that was launched into low Earth orbit in 1990?

Question ID : 584189268

Ans  1. Spitzer 2. James Webb 3. Chandra 4. HubbleStatus : **Answered**




Chosen Option : 4

Q.7 Pankaj buys 10 lemons for Rs. 80. At what price should he sell a dozen lemons, if he wishes to make a profit of 25%?

Ans  1. Rs. 10 2. Rs. 100 3. Rs. 120 4. Rs. 240Question ID : **584189323**Status : **Answered**





Chosen Option : 3

Q.8 Rs. 200 was distributed among three persons – Anil, Binay and Chinmay. Binay received 50% more than Chinmay. Anil received Rs.10 more than 150% of what Binay received. How much money did Anil receive?



Ans  1. Rs. 100 2. Rs. 60 3. Rs. 40 4. Rs. 43Question ID : **584189319**Status : **Answered**

Chosen Option : 1

Q.9 Which of the following uses only convex lens?





Ans  1. Microscope 2. Flashlights 3. Peepholes 4. Car HeadlightsQuestion ID : **584189282**Status : **Answered**

Chosen Option : 4

Q.10 An alphabet series is given below with one term missing, shown by a “?”. Choose from the options the correct alternative that will fit the pattern of the series.
ADM, BFL, CHK, ?, ELI, FNHAns  1. DHJ 2. DJJ 3. DHL 4. DJKQuestion ID : **584189339**Status : **Answered**





Chosen Option : 2

Q.11 Which of the following is an annual nationwide campaign in Singapore encouraging awareness and action for the environment?

Ans  1. Eco Action Day 2. My Planet Day 3. Earth Day 4. Cycling DayQuestion ID : **584189291**Status : **Answered**





Chosen Option : 4

Q.12 In 2015, which ex-President of Romania was prosecuted for crime against humanity?

Ans  1. John Ashe 2. Richard Heck 3. Khaled Bahah 4. Ion IliescuQuestion ID : **584189265**Status : **Not Attempted**

Chosen Option : --

Q.13 Which of the following States came into existence in 2014?

Ans  1. Uttarakhand 2. Jharkhand 3. Telangana 4. ChhattisgarhQuestion ID : **584189258**Status : **Answered**

Chosen Option : 3

A trader buys a Persian rug for Rs. 1235 and sells it for Rs. 1500. Find his gain percentage.

Q.14

Ans

- ☐ 1. 17.67 %
- ☐ 2. 20.1 %
- ☐ 3. 22.5 %
- ☒ 4. 21.46 %

Question ID : 584189313

Status : Answered

Chosen Option : 4

Q.15 A number series is given below with one number missing, shown by a “?”. Choose from the options the correct alternative that will fit the pattern of the series.

4, 9, 19, ?, 79, 159

Ans

- ☐ 1. 33
- ☐ 2. 59
- ☒ 3. 39
- ☐ 4. 34

Question ID : 584189358

Status : Answered

Chosen Option : 3

Comprehension:

Read the information given below and answer the questions that follow:

Following table gives the data on the number of students who appeared, qualified and were selected from various states in a national level exam.

Students who			
State	Appeared	Qualified	Were Selected
Maharashtra	8500	950	80
Uttar Pradesh	5600	620	85
Kerala	7500	720	78
Delhi	4800	400	48
Arunachal Pradesh	7000	650	70

SubQuestion No : 16

Q.1 Which State has the highest ratio of number of students selected to the number of students who qualified from that State?

Ans

- ☐ 1. Maharashtra
- ☒ 2. Uttar Pradesh
- ☐ 3. Kerala
- ☐ 4. Delhi

Question ID : 584189360

Status : Answered

Chosen Option : 1

Comprehension:

Read the information given below and answer the questions that follow:

Following table gives the data on the number of students who appeared, qualified and were selected from various states in a national level exam.

Students who			
State	Appeared	Qualified	Were Selected
Maharashtra	8500	950	80
Uttar Pradesh	5600	620	85
Kerala	7500	720	78
Delhi	4800	400	48
Arunachal Pradesh	7000	650	70

SubQuestion No : 17

Q.1 Which State has the lowest percentage of qualifications over those who had appeared?

Ans

Question ID : 584189361

Status : Answered

☒ 1. Kerala

Chosen Option : 4

☒ 3. Maharashtra☒ 4. Delhi

Comprehension:

Read the information given below and answer the questions that follow:

Following table gives the data on the number of students who appeared, qualified and were selected from various states in a national level exam.

Students who			
State	Appeared	Qualified	Were Selected
Maharashtra	8500	950	80
Uttar Pradesh	5600	620	85
Kerala	7500	720	78
Delhi	4800	400	48
Arunachal Pradesh	7000	650	70

SubQuestion No : 18

Q.18 What percentage of students who appeared in the exam were selected?

Question ID : 584189362

Status : Answered

Chosen Option : 3

Ans ☒ 1. 0.90 %☒ 2. 2.11 %☒ 3. 1.08 %☒ 4. 2 %

Comprehension:

Read the information given below and answer the questions that follow:

Following table gives the data on the number of students who appeared, qualified and were selected from various states in a national level exam.

Students who			
State	Appeared	Qualified	Were Selected
Maharashtra	8500	950	80
Uttar Pradesh	5600	620	85
Kerala	7500	720	78
Delhi	4800	400	48
Arunachal Pradesh	7000	650	70

SubQuestion No : 19

Q.19 Which State has the highest ratio of number of students selected to the number of students who appeared from that State?

Question ID : 584189363

Status : Answered

Chosen Option : 1

Ans ☒ 1. Uttar Pradesh☒ 2. Maharashtra☒ 3. Kerala☒ 4. Delhi

Q.20

Question ID : 584189353

Status : Answered

Chosen Option : 2

In the question given below, are given two statements followed by a few conclusions. You have to take the two given statements to be true even if they seem to be at variance with commonly known facts. Read all the conclusions and then decide which of the given conclusions follow the two given statements disregarding commonly known facts.

Statements:

- Ans ☒ 1. All arrows are bullets
☒ 2. Conclusions 1, 2 and 3 follow
☒ 3. Conclusions 2, 3 and 4 follow
☒ 4. All conclusions follow
☐ 5. No bullet is an arrow

Q.21 A batsman scored 150 runs in a one-day cricket match. He hit 20 fours and 5 sixes. Calculate the percentage of runs he scored by running between the wickets.

- Ans ☒ 1. 73.33%
☒ 2. 31.33%
☒ 3. 25%
☒ 4. 26.67%

Question ID : 584189318

Status : Answered

Chosen Option : 4

Q.22 'Integrated Circuits' belonged to which of the following generation of Computers?

- Ans ☒ 1. Fourth Generation
☒ 2. Fifth Generation
☒ 3. Third Generation
☒ 4. Second Generation

Question ID : 584189281

Status : Answered

Chosen Option : 1

Q.23 Based on the relationship between the first two words, find out the missing word.
 ODISHA : ODISSI :: KERALA : _____

- Ans ☒ 1. KUCHIPUDI
☒ 2. BHARATANATYAM
☒ 3. KATHAK
☒ 4. KATHAKALI

Question ID : 584189342

Status : Answered

Chosen Option : 2

Q.24 If 'J' means '×', 'K' means '+', 'Q' means '-' and 'T' means '÷' then what is the value of:
 26 J 74 K 4 T 5 Q 2

- Ans ☒ 1. 220
☒ 2. 488
☒ 3. 478
☒ 4. 376

Question ID : 584189336

Status : Answered

Chosen Option : 3

Q.25 Who is the author of the novel 'Anandamath'?

- Ans ☒ 1. Subramania Bharathi
☒ 2. Bhartendu Harish Chandra
☒ 3. Bankim Chandra Chattopadhyay
☒ 4. Dinabandhu Mitra

Question ID : 584189288

Status : Answered

Chosen Option : 3

Comprehension:

Read the passage given below and answer the questions that follow:

In a class of 32 students, 20 of them like Spiderman and 14 like Batman. 6 students like neither Spiderman nor Batman.

SubQuestion No : 26

Q.2 How many students like either Spiderman or Batman?

- Ans ☒ 1. 6
☒ 2. 28
☒ 3. 12

Question ID : 584189357

Status : Answered

Chosen Option : 3

✓ 4. 26

Comprehension:

Read the passage given below and answer the questions that follow:

In a class of 32 students, 20 of them like Spiderman and 14 like Batman. 6 students like neither Spiderman nor Batman.

SubQuestion No : 27

Q.27 How many students like both Spiderman and Batman?

- Ans
- ☒ 1. 5
 - ☒ 2. 6
 - ☒ 3. 7
 - ☒ 4. 8

Question ID : 584189356

Status : Answered

Chosen Option : 4

Q.28 Who said - 'Give me blood and I will give you freedom'?

- Ans
- ☒ 1. Mahatma Gandhi
 - ☒ 2. Subhas Chandra Bose
 - ☒ 3. Jawaharlal Nehru
 - ☒ 4. Chandra Shekhar Azad

Question ID : 584189273

Status : Answered

Chosen Option : 2

Q.29 Which of the following Articles of the Constitution of India defines the 'Right to Education'?

- Ans
- ☒ 1. Article 5
 - ☒ 2. Article 21A
 - ☒ 3. Article 23
 - ☒ 4. Article 12

Question ID : 584189254

Status : Answered

Chosen Option : 2

Q.30 An electric bulb of 60 W is connected to a source of 240 V. The current drawn by the bulb will be:

- Ans
- ☒ 1. 2.5 A
 - ☒ 2. 4 A
 - ☒ 3. 0.4 A
 - ☒ 4. 0.25 A

Question ID : 584189256

Status : Answered

Chosen Option : 2

Q.31 Four words are given below out of which three are alike in some manner and one is different. Which one is different from the rest?

- Ans
- ☒ 1. Chalk
 - ☒ 2. Paper
 - ☒ 3. Blackboard
 - ☒ 4. Slate

Question ID : 584189343

Status : Answered

Chosen Option : 1

Q.32 In December 2015, Sadhana Shivdasani passed away. She was a popular _____.

- Ans
- ☒ 1. Actress
 - ☒ 2. Politician
 - ☒ 3.
 - ☒ 4.

Question ID : 584189248

Status : Answered

Chosen Option : 2

Q.33

- Ans
- ☒ 1.
 - ☒ 2.
 - ☒ 3.
 - ☒ 4.

Question ID : 584189297

Status : Answered

Chosen Option : 3

Q.34

Study Kit for Railway Recruitment Board Exams

- 100% Syllabus Covered
- 4 Booklets
- 950+ Pages
- One Year Current Affairs (Only PDF no Hard Copy)

Price of the Kit
₹ 6,000 ₹ 1999

For Any Guidance Call our Expert at : +91 8800734161, 011-45151781

Study Kit for Railway Recruitment Board (RRB) Exams

What you will get:

- 100% Syllabus Covered in printed format.
- 4 Booklets
- 950+ Pages
- **One Year Current Affairs (PDF Copy)**
- Guidance & Support from Our Experts (via Call and Email)

Our Objectives:

- Firstly to cover 100% syllabus of the Examination.
- Secondly to compile all the required study materials in a single place, So to save the precious time of the aspirants.

For More Information Click Given below link:

<http://www.rrbportal.com/study-kit>

Online Coaching for Railway Recruitment Board Exams

- 100% Syllabus Covered
- Home assignment
- Important current Affairs Materials
- Online Tests will be conducted after the end of each subject

Price of Online Coaching
₹ 1999 ₹ 499

For Any Guidance Call our Expert at : +91 8800734161, 011-45151781

Online Coaching for RRB Recruitment Exams

What you will get:

1. All the relevant and required materials of subjects mention in the RRB syllabus like:
 - 100% RRB Exam Syllabus Covered with MCQs.
 - Special Current Affairs.
2. Home assignment
3. Important current affairs materials for RRB Examination will be provided
4. Online Tests will be conducted after the end of each subject.
5. At the end of your course, five comprehensive test will be conducted to evaluate your performance.

Our Objectives:





- Firstly to cover 100% syllabus of the Examination.
- Secondly to compile all the required study materials in a single place, So to save the precious time of the aspirants.

Our Strategy:





- Content of every section of the syllabus is developed after a exhaustive research of last year Question Papers.
- Every section is covered with practice set.

For More Information Click Given below link:


<http://rrbportal.com/online-coaching>

Ans  1.
 2.
 3.
 4.





Question ID : 584189267
Status : **Answered**
Chosen Option : 1

Q.35
Ans  1.
 2.
 3.
 4.



Question ID : 584189346
Status : **Answered**
Chosen Option : 3

Q.36
Ans  1.
 2.
 3.
 4.

Question ID : 584189289
Status : **Answered**
Chosen Option : 2

Q.37
Ans  1.
 2.
 3.
 4.

Question ID : 584189331
Status : **Answered**
Chosen Option : 3

Q.38
Ans  1.
 2.
 3.
 4.

Question ID : 584189327
Status : **Answered**
Chosen Option : 2

Q.39
Ans  1.
 2.
 3.
 4.



Question ID : 584189285
Status : **Answered**
Chosen Option : 3

Q.40
Ans  1.
 2.
 3.
 4.

Question ID : 584189274
Status : **Answered**
Chosen Option : 3

Q.41
Ans  1.
 2.
 3.
 4.





Question ID : 584189301
Status : **Answered**
Chosen Option : 2

Q.42
Ans  1.
 2.

Question ID : 584189305
Status : **Answered**
Chosen Option : 3





-  3.
 4.

Q.43

- Ans  1.
 2.
 3.
 4.




Question ID : 584189366
Status : Answered
Chosen Option : 2

Q.44

- Ans  1.
 2.
 3.
 4.





Question ID : 584189309
Status : Answered
Chosen Option : 1

Q.45

- Ans  1.
 2.
 3.
 4.





Question ID : 584189368
Status : Answered
Chosen Option : 3

Q.46

- Ans  1.
 2.
 3.
 4.





Question ID : 584189303
Status : Answered
Chosen Option : 1

Q.47

- Ans  1.
 2.
 3.
 4.





Question ID : 584189259
Status : Answered
Chosen Option : 3

Q.48

- Ans  1.
 2.
 3.
 4.





Question ID : 584189266
Status : Answered
Chosen Option : 4

Q.49

- Ans  1.
 2.
 3.
 4.


Question ID : 584189294
Status : Answered
Chosen Option : 3

Q.50

- Ans  1.
 2.
 3.
 4.





Question ID : 584189251
Status : Answered
Chosen Option : 2

Q.51

- Ans
-  1.
 -  2.
 -  3.
 -  4.





Question ID : 584189337
Status : **Answered**
Chosen Option : 3

Q.52

- Ans
-  1.
 -  2.
 -  3.
 -  4.





Question ID : 584189283
Status : **Answered**
Chosen Option : 2

Q.53

- Ans
-  1.
 -  2.
 -  3.
 -  4.



Question ID : 584189302
Status : **Answered**
Chosen Option : 2

Q.54

- Ans
-  1.
 -  2.
 -  3.
 -  4.

Question ID : 584189290
Status : **Answered**
Chosen Option : 4

Q.55

- Ans
-  1.
 -  2.
 -  3.
 -  4.

Question ID : 584189324
Status : **Answered**
Chosen Option : 2

Q.56

- Ans
-  1.
 -  2.
 -  3.
 -  4.

Question ID : 584189293
Status : **Answered**
Chosen Option : 4

Q.57

- Ans
-  1.
 -  2.
 -  3.
 -  4.

Question ID : 584189272
Status : **Answered**
Chosen Option : 3

Q.58

- Ans
-  1.
 -  2.
 -  3.
 -  4.

Question ID : 584189255
Status : **Answered**
Chosen Option : 2

Q.59





- Ans
-  1.

Question ID : 584189270
Status : **Answered**

-  2.
 3.
 4.

Chosen Option : 2

Q.60




- Ans  1.
 2.
 3.
 4.

Question ID : 584189249

Status : Answered

Chosen Option : 2

Q.61





- Ans  1.
 2.
 3.
 4.

Question ID : 584189328

Status : Answered

Chosen Option : 2

Q.62





- Ans  1.
 2.
 3.
 4.

Question ID : 584189329

Status : Answered

Chosen Option : 2

Q.63





- Ans  1.
 2.
 3.
 4.

Question ID : 584189271

Status : Answered

Chosen Option : 2

Q.64





- Ans  1.
 2.
 3.
 4.

Question ID : 584189252

Status : Answered

Chosen Option : 2

Q.65





- Ans  1.
 2.
 3.
 4.

Question ID : 584189250

Status : Answered

Chosen Option : 3

Q.66




- Ans  1.
 2.
 3.
 4.

Question ID : 584189332

Status : Answered

Chosen Option : 1


Q.67

- Ans  1.
 2.
 3.

Question ID : 584189262

Status : Answered

Chosen Option : 3



रेलवे भर्ती बोर्ड
स्टडी किट

FOR HELP CALL
011-45151781, 45041881

रेलवे भर्ती बोर्ड (आरआरबी) परीक्षा अध्ययन सामग्री

- 100% Syllabus Covered
- 4 Comprehensive Books
- 1000 Pages
- Current Affairs (PDF)
- Practice MCQs
- Support and Guidance

Only
~~₹6,000/-~~
₹1,995/-
70% Off

RRB PORTAL
www.rrbportal.com

रेलवे भर्ती बोर्ड (आरआरबी) एनटीपीसी परीक्षा के लिए अध्ययन सामग्री हमारी अध्ययन सामग्री में आप पाएँगे-

1. अध्यायवार M.C.Q
2. गणित एवं तार्किक क्षमता को हल करने की सरल विधि
3. अभ्यास प्रश्न

आप क्या प्राप्त करेंगे?

- माध्यम: हिन्दी
- 100 प्रतिशत पाठ्यक्रम
- 838 पृष्ठ
- कुल 4 पुस्तिकायें
- हमारे विशेषज्ञों द्वारा मार्गदर्शन और सहायता

For More Information Click Given below link:

<http://www.rrbportal.com/study-kit-hindi>

Online Test Series for Railway Recruitment Board Exams

- 100% Syllabus Covered
- All India Rank to Assess your Performance
- Answers of Questions with Reports
- Telephonic and Email Support.

Price of OTS
For 8 Test ₹ 999 ₹ 499
For 15 Test ₹ 1799 ₹ 799

For Any Guidance Call our Expert at : +91 8800734161, 011-45151781

Online Test Series for Railway Recruitment Board (RRB) Exams

What you will get:

- 100% Syllabus Covered in printed format.
- Guidance & Support from Our Experts (via Call and Email)

Our Objectives:

- Firstly to cover 100% syllabus of the Examination.
- Secondly to compile all the required study materials in a single place, So to save the precious time of the aspirants.

Our Strategy:





- Content of every section of the syllabus is developed after a exhaustive research of last year Question Papers.
- Every section is covered with practice set

For More Information Click Given below link:

<http://www.rrbportal.com/online-test-series>





 4.

Q.68

Ans  1.
 2.
 3.
 4.





Question ID : 584189351
Status : Answered
Chosen Option : 2

Q.69

Ans  1.
 2.
 3.
 4.





Question ID : 584189261
Status : Answered
Chosen Option : 1

Q.70

Ans  1.
 2.
 3.
 4.





Question ID : 584189365
Status : Answered
Chosen Option : 4

Q.71

Ans  1.
 2.
 3.
 4.





Question ID : 584189322
Status : Answered
Chosen Option : 1

Q.72

Ans  1.
 2.
 3.
 4.





Question ID : 584189354
Status : Answered
Chosen Option : 4

Q.73

Ans  1.
 2.
 3.
 4.





Question ID : 584189321
Status : Answered
Chosen Option : 4

Q.74

Ans  1.
 2.
 3.
 4.





Question ID : 584189247
Status : Answered
Chosen Option : 1

Q.75




Ans  1.
 2.
 3.
 4.

Question ID : 584189333
Status : Answered
Chosen Option : 1





Q.76

Ans  1.
 2.
 3.
 4.


Question ID : 584189299
Status : Answered
Chosen Option : 1

Q.77
Ans  1.
 2.
 3.
 4.

Question ID : 584189314
Status : Answered
Chosen Option : 1

Q.78
Ans  1.
 2.
 3.
 4.

Question ID : 584189352
Status : Answered
Chosen Option : 4

Q.79
Ans  1.
 2.
 3.
 4.

Question ID : 584189296
Status : Answered
Chosen Option : 4

Q.80
Ans  1.
 2.
 3.
 4.

Question ID : 584189335
Status : Answered
Chosen Option : 3

Q.81
Ans  1.
 2.
 3.
 4.



Question ID : 584189316
Status : Answered
Chosen Option : 4

Q.82
Ans  1.
 2.
 3.
 4.

Question ID : 584189315
Status : Answered
Chosen Option : 3

Q.83
Ans  1.
 2.
 3.
 4.

Question ID : 584189298
Status : Answered
Chosen Option : 1

Q.84
Ans  1.
 2.

Question ID : 584189369
Status : Answered
Chosen Option : 4

 3.

 4.

Q.85

Ans  1.

 2.

 3.

 4.

Question ID : 584189340

Status : Answered

Chosen Option : 1

Q.86

Ans  1.

 2.

 3.

 4.

Question ID : 584189306

Status : Answered

Chosen Option : 2

Q.87

Ans  1.

 2.

 3.

 4.

Question ID : 584189277

Status : Answered

Chosen Option : 4

Q.88

Ans  1.

 2.

 3.

 4.

Question ID : 584189308

Status : Answered

Chosen Option : 1

Q.89

Ans  1.

 2.

 3.

 4.

Question ID : 584189275

Status : Answered

Chosen Option : 4

Q.90

Ans  1.

 2.

 3.

 4.

Question ID : 584189292

Status : Not Attempted

Chosen Option : --

Q.91

Ans  1.

 2.

 3.

 4.

Question ID : 584189326

Status : Answered

Chosen Option : 1

Comprehension:

SubQuestion No : 92

Q.9

2

Ans  1.

 2.

Question ID : 584189350

Status : Not Attempted

Chosen Option : --

 3.

 4.

Comprehension:

SubQuestion No : 93

Q.9
3

Ans  1.

 2.

 3.

 4.

Question ID : 584189349

Status : **Not Attempted**

Chosen Option : --

Comprehension:

SubQuestion No : 94

Q.9
4

Ans  1.

 2.

 3.

 4.

Question ID : 584189348

Status : **Not Attempted**

Chosen Option : --

Q.95

Ans  1.

 2.

 3.

 4.

Question ID : 584189320

Status : **Answered**

Chosen Option : 4

Q.96

Ans  1.

 2.

 3.

 4.

Question ID : 584189338

Status : **Answered**

Chosen Option : 3

Q.97

Ans  1.

 2.

 3.

 4.

Question ID : 584189341

Status : **Answered**

Chosen Option : 1

Q.98

Ans  1.

 2.

 3.

 4.

Question ID : 584189286

Status : **Answered**

Chosen Option : 3

Q.99

Ans  1.

 2.

 3.

 4.

Question ID : 584189307

Status : **Not Attempted**

Chosen Option : --

Q.10

0

- Ans
- ☒ 1.
 - ☒ 2.
 - ☒ 3.
 - ☒ 4.

Question ID : 584189257
Status : Answered
Chosen Option : 1

Q.10
1

- Ans
- ☒ 1.
 - ☒ 2.
 - ☒ 3.
 - ☒ 4.

Question ID : 584189278
Status : Answered
Chosen Option : 1

Q.10
2

- Ans
- ☒ 1.
 - ☒ 2.
 - ☒ 3.
 - ☒ 4.

Question ID : 584189287
Status : Answered
Chosen Option : 2

Q.10
3

- Ans
- ☒ 1.
 - ☒ 2.
 - ☒ 3.
 - ☒ 4.

Question ID : 584189364
Status : Answered
Chosen Option : 2

Q.10
4

- Ans
- ☒ 1.
 - ☒ 2.
 - ☒ 3.
 - ☒ 4.

Question ID : 584189263
Status : Answered
Chosen Option : 4

Q.10
5

- Ans
- ☒ 1.
 - ☒ 2.
 - ☒ 3.
 - ☒ 4.

Question ID : 584189310
Status : Answered
Chosen Option : 2

Q.10
6

- Ans
- ☒ 1.
 - ☒ 2.
 - ☒ 3.
 - ☒ 4.

Question ID : 584189325
Status : Answered
Chosen Option : 3





Q.10
7

- Ans
- ☒ 1.
 - ☒ 2.
 - ☒ 3.

Question ID : 584189312
Status : Answered
Chosen Option : 4




 4.

Q.10
8

Ans  1.
 2.
 3.
 4.





Question ID : 584189345
Status : **Answered**
Chosen Option : 1

Q.10
9

Ans  1.
 2.
 3.
 4.





Question ID : 584189317
Status : **Not Attempted**
Chosen Option : --

Q.11
0

Ans  1.
 2.
 3.
 4.




Question ID : 584189334
Status : **Answered**
Chosen Option : 2

Q.11
1

Ans  1.
 2.
 3.
 4.





Question ID : 584189260
Status : **Answered**
Chosen Option : 4

Q.11
2

Ans  1.
 2.
 3.
 4.





Question ID : 584189276
Status : **Answered**
Chosen Option : 3

Q.11
3

Ans  1.
 2.
 3.
 4.

Question ID : 584189330
Status : **Answered**
Chosen Option : 2

Q.11
4

Ans  1.
 2.
 3.
 4.

Question ID : 584189253
Status : **Answered**
Chosen Option : 2





Q.11
5

Ans  1.

Question ID : 584189279
Status : **Answered**
Chosen Option : 1





-  2.
 3.
 4.

Q.11
6

- Ans  1.
 2.
 3.
 4.

Question ID : **584189304**
Status : **Answered**
Chosen Option : **4**

Q.11
7

- Ans  1.
 2.
 3.
 4.




Question ID : **584189344**
Status : **Answered**
Chosen Option : **4**

Q.11
8

- Ans  1.
 2.
 3.
 4.





Question ID : **584189269**
Status : **Answered**
Chosen Option : **2**

Q.11
9

- Ans  1.
 2.
 3.
 4.

Question ID : **584189264**
Status : **Answered**
Chosen Option : **2**

Q.12
0

- Ans  1.
 2.
 3.
 4.

Question ID : **584189295**
Status : **Not Attempted**
Chosen Option : **--**

Postal Test Series for Railway Recruitment Board Exams

- 100% Syllabus Covered
- Evaluate your performance section wise
- Answers of Questions with Reports
- Telephonic and Email Support.

Price of Test Series
For 15 Test ₹ 1499 ₹ 999

For Any Guidance Call our Expert at : +91 8800734161, 011-45151781

Postal Test Series Programme For Railway Recruitment Board (RRB) Exams

What you will get:

- You will get 15 comprehensive test (English Medium).
- OMR sheets will be provided to the candidate along with the test papers.
- Answers of the test would be sent along with the test papers
- Guidance & Support from Our Experts (via Call and Email)

Our Objectives:

- Formulate the question in accordance with latest RRB pattern that is concept based.
- Evaluate your performance section wise so that you would able to know your weaker section.
- Then evaluate your performance in a comprehensive manner.


Our Strategy:

- Content of every section of the syllabus is developed after a exhaustive research of last year Question Papers.
- Every section is covered with practice set.

For More Information Click Given below link:

<http://www.rrbportal.com/test-series/postal-rrb>

Study Kit for RRB (Tier - 2) Exam



➤ 100% Syllabus Covered

➤ 4 Booklets

➤ 950+ Pages

➤ One Year Current Affairs (Only PDF no Hard Copy)

Price of the Kit
~~₹ 6,000~~ ₹ 1999

For Any Guidance Call our Expert at : +91 8800734161, 011-45151781

Study Kit for Railway Recruitment Board (RRB) "Tier -2" Exam

What you will get:

- 100% Syllabus Covered in printed format.
- 3 Booklets
- 750+ Pages
- **One Year Current Affairs (PDF Copy)**
- Guidance & Support from Our Experts (via Call and Email)

Our Objectives:

- Firstly to cover 100% syllabus of the Examination.
- Secondly to compile all the required study materials in a single place, So to save the precious time of the aspirants.

For More Information Click Given below link:

<http://www.rrbportal.com/study-kit/Railway-NTPC-tier-2-Exam>

Postal Test Series for Railway Recruitment Board (Tier -2) Exam

- 100% Syllabus Covered
- Evaluate your performance section wise
- Answers of Questions with OMR Sheet
- Telephonic and Email Support.

:: Price ::
For 15 Test ₹ 1499 ₹ 799

For Any Guidance Call our Expert at : +91 8800734161, 011-45151781

Postal Test Series Programme For Railway Recruitment Board (RRB) Tier -2 Exam (English Medium)

What you will get:

- You will get 15 comprehensive test (English Medium).
- OMR sheets will be provided to the candidate along with the test papers.
- Answers of the test would be sent along with the test papers
- Guidance & Support from Our Experts (via Call and Email)

Our Objectives:

- Formulate the question in accordance with latest RRB Tier -2 pattern that is concept based.
- Evaluate your performance section wise so that you would able to know your weaker section.
- Then evaluate your performance in a comprehensive manner.

For More Information Click Given below link:

<http://rrbportal.com/test-series/postal-rrb-ntpc-tier-2>